



























Favorite fruits

This table shows the favorite fruits of a class of children.

grapes								
strawberries								
bananas								
cherries								
oranges								
apples								

Number of children

How many preferred each fruit?

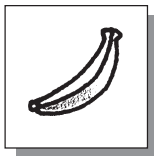


3



Which fruit? Draw.

5



8

1

3

Say and draw.

The fruit chosen most often is

The fruit chosen least often is

More children chose

























than

My favorite is



Favorite fruits

This table shows the favorite fruits of a class of children.

grapes								
strawberries								
bananas								
cherries								
oranges								
apples								

Number of children

How many preferred each fruit?



3



8



5



1



3



4

Which fruit? Draw.

5



8



1



3




Say and draw.

The fruit chosen most often is



The fruit chosen least often is



More children chose



than



My favorite is



Children should be able to give reasons for their choices. Make sure they understand that each individual drawing of a fruit or a bunch of fruit on the table stands for one child in the class.